

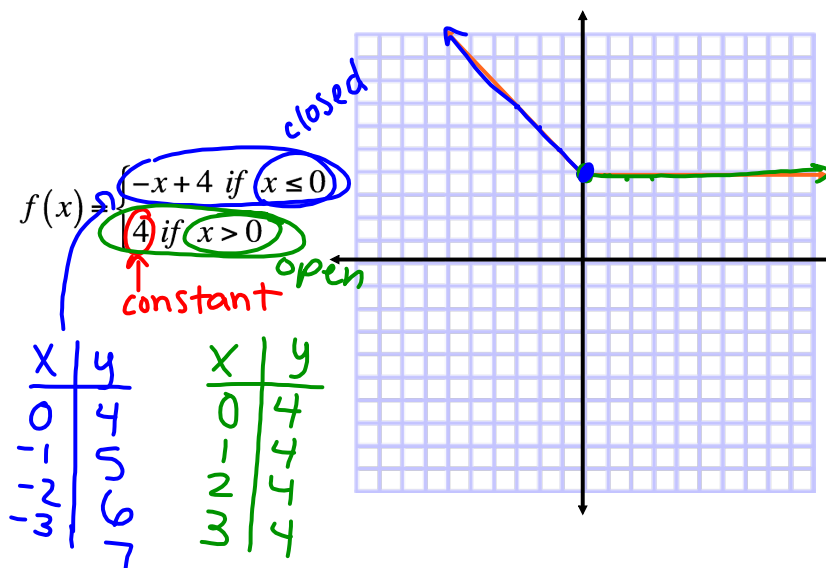
1-3 Piecewise and Step Functions

Objectives:

- I can graph a piecewise function
- I can write the equation of a piecewise function
- I can identify least and greatest integer functions

A piecewise function is a function with different equations defined over unique intervals of x .

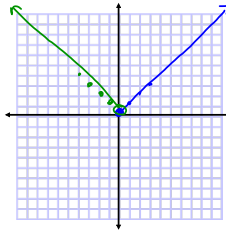
For example:



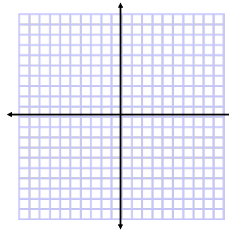
Graph the following:

$$f(x) = \begin{cases} x & \text{if } x \geq 0 \\ -x & \text{if } x < 0 \end{cases}$$

x	y	x	y
0	0	0	0
1	1	-1	1
2	2	-2	2
3	3	-3	3

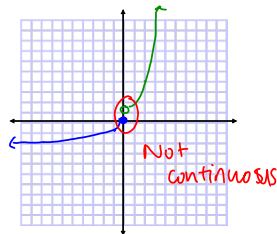


$$f(x) = \begin{cases} x^2 & \text{if } x \leq 0 \\ \sqrt{x} & \text{if } x > 0 \end{cases}$$



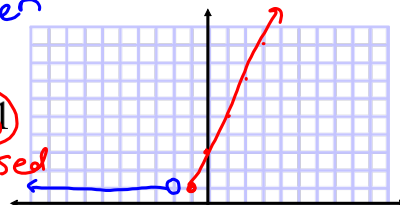
$$f(x) = \begin{cases} x^3 & \text{if } x \leq 0 \\ 2^x & \text{if } x > 0 \end{cases}$$

x	y	x	y
0	0	0	1
-1	-1	1	2
-2	-8	2	4



$$f(x) = \begin{cases} 1, & x < -2 \\ 2x + 3, & x \geq -1 \end{cases}$$

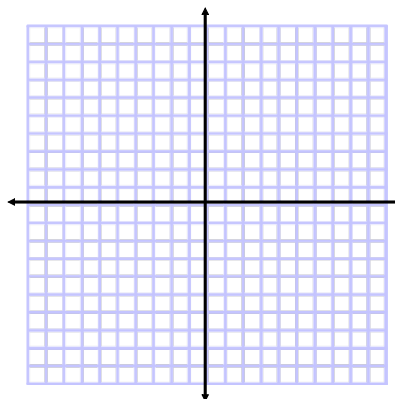
x	y	x	y
-2	1	-1	1
-3	1	0	3
-4	1	1	5
-5	1	2	7



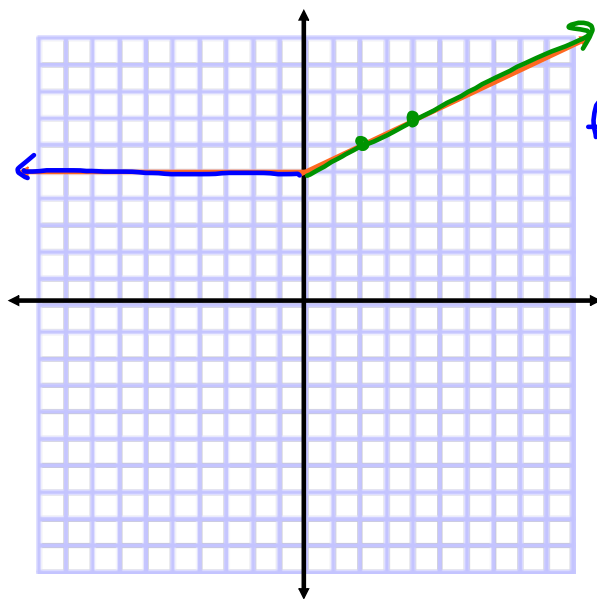
$$D: (-\infty, -2) \cup [-1, \infty)$$

$$R: [1, \infty)$$

$$f(x) = \begin{cases} x^2 - 2, & x < 0 \\ \sqrt{x}, & x > 4 \end{cases}$$



Write the equation for the following piecewise functions



$$f(x) = \begin{cases} 5, & x < 0 \\ \frac{1}{2}x + 5, & x \geq 0 \end{cases}$$

$$mx + b$$

\uparrow \uparrow
 rise 5
 run 2

Problem 2: Taxi Fares

In 2006, the rate for a taxi ride in Macon, Georgia, was \$1.20 for the first mile or part of a mile and \$1.20 for each additional mile or part of a mile.

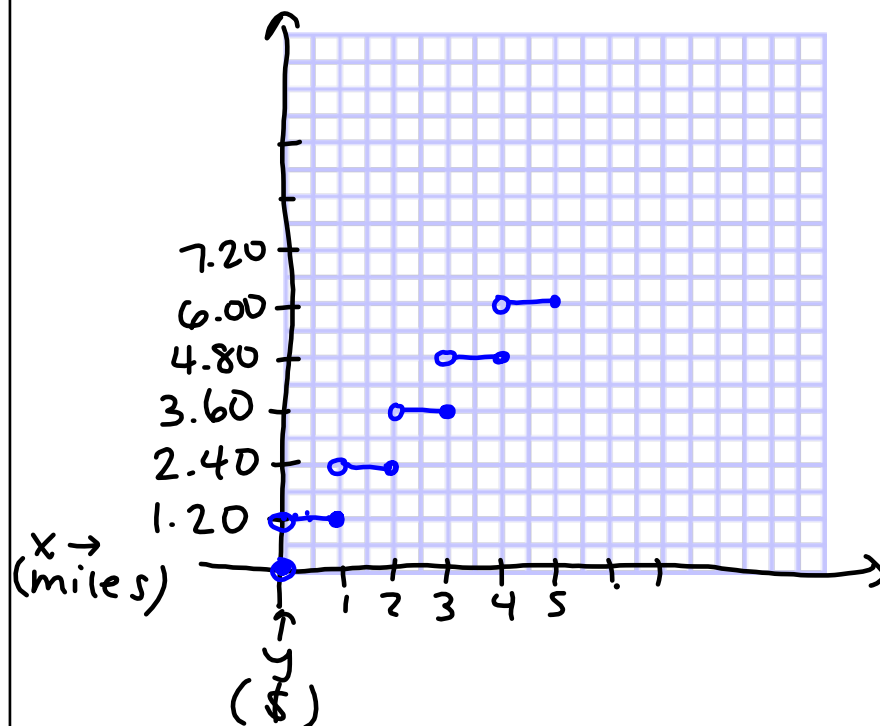
- Define a piecewise function, $g(x)$, for the cost of a taxi ride up to 5 miles.

$$f(x) = \begin{cases} \$1.20, & 0 < x \leq 1 \\ \$2.40, & 1 < x \leq 2 \\ \$3.60, & 2 < x \leq 3 \\ \$4.80, & 3 < x \leq 4 \\ \$6.00, & 4 < x \leq 5 \end{cases}$$

\uparrow
 miles

- What is the slope of each interval? Explain your reasoning.

3. Graph $g(x)$ for $x < 5$ miles.



4. Describe the graph of the function as either increasing or decreasing.

Neither (constant)

You have just graphed a *step function*. A **step function** is a piecewise function whose pieces are disjoint constant functions.

5. Why do you think this function is called a step function?

Problem 3 Special Step Functions

The *greatest integer function* is a special kind of step function. The **greatest integer function**, also known as the **floor function**, $G(x) = \lfloor x \rfloor$ is defined as the greatest integer less than or equal to x .

1. Evaluate each using the greatest integer function.

a. $\lfloor 2 \rfloor = \underline{2}$

b. $\lfloor 0.17 \rfloor = \underline{0}$

c. $\lfloor 2.34 \rfloor = \underline{2}$

d. $\lfloor -1.2 \rfloor = \underline{-2}$

e. $\lfloor 2.99999 \rfloor = \underline{2}$

f. $\lfloor -0.2 \rfloor = \underline{-1}$

The *least integer function* is another special kind of step function. The **least integer function** $L(x) = \lceil x \rceil$ also known as the **ceiling function**, is defined as the least integer greater than or equal to x .

3. Calculate each:

a. $\lceil 2 \rceil = \underline{2}$

b. $\lceil 0.17 \rceil = \underline{1}$

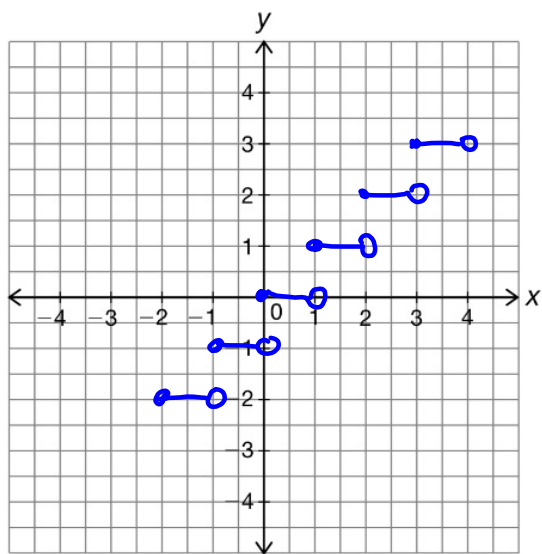
c. $\lceil 2.34 \rceil = \underline{3}$

d. $\lceil -1.2 \rceil = \underline{-1}$

e. $\lceil 2.99999 \rceil = \underline{3}$

f. $\lceil -0.2 \rceil = \underline{0}$

Graph $G(x) = \lfloor x \rfloor$.



Graph $L(x) = \lceil x \rceil$.

